





United States

Map Key	
	sunny
	rain
	partly cloudy
	snow

A Weather Map

Monday

1. What kind of map is shown?

a land and water map a road map a weather map

2. How many states are shown on the large map?

Tuesday

1. What is the symbol for partly cloudy?



2. Which state is having a sunny day?

Wednesday

1. What kind of weather is Nebraska having?

2. People in South Dakota are having a _____ day.

rainy snowy sunny



A Weather Map

Thursday

1. Which states are probably the coldest?

2. If it gets colder in South Dakota, what might happen to the weather?

Friday

1. The five states are located in the _____ part of the United States.

eastern northern southern western

2. Probably which month and season is it for the five states?

August, summer May, spring

January, winter September, fall

Challenge

Which state has your favorite kind of weather? Write the name of the state on the map. Write why you like that kind of weather.

